

Azaan International School

Activity sheet I (2019-20)

Grade - II

Sec: _____

Subject-English

Name: _____

Date: _____

Lesson: 8 How many seconds in a minute?

VOCABULARY:

I. Fill in the blanks with the correct action words.

1. I _____ (play/wash) my hands before eating my food.
2. I _____ (play/run) football with my friends in the park.
3. I _____ (drink/eat)milk every morning.
4. I _____ (brush/comb)my hair every day.
5. I _____ (read/write)story books every evening.

II. Unscramble the letters to spell the action words.

1. ylf- _____
2. ylpa- _____
3. rdea- _____
4. wtrie- _____
5. wims- _____

III. Describe your day and fill the time.

Eat, read, wake up, watch

1. I _____ at 7'o clock in the morning.
2. I _____ cartoons in the evening.
3. I _____ at 7'o clock at night.
4. I _____ at 9'o clock at night.

Azaan International School

Activity sheet I (2019-20)

Grade – II

Sec: _____

Subject-E.V.S

Name: _____

Date: _____

Lesson : 12. Places in our neighborhood.

And 13. People who help us.

I. List the different places which are there in our neighborhood.

a. _____

b. _____

c. _____

d. _____

II. Fill in the blanks.

1. The area near our house is called our _____.[neighborhood/market]

2. A _____ has many shops that sell things we need.[market/ park]



3. A teacher teaches us many things in _____.[school/ hospitals]

4. A _____ has many doctors and nurses.[post office/hospitals]

5. A _____ makes and repairs furniture.[tailor/ carpenter]

6. A _____ grows food for us to eat. [postman/farmer]

III. Match the following.



IV. Choose the correct answer.

1. Who mends our shoes. []
a. butcher b. cobbler c. postman
2. A vehicle that takes us to a hospital in case of an emergency. []
a. bus b. aeroplane c. ambulance
3. A shop from where we get medicines. []
a. stationery shop b. green grocer c. chemist's shop
4. Where do we go when we are sick or hurt. []
a. police station b. hospital c. school

5. People go there for reading books . []

a. hospital b. park c. library

6. Which of these a tailor does to help us? []

a. puts out fires b. stitches clothes c. grows food

7. A person who sells fruits and vegetables. []

a. green grocer b. mason c. postman

V. True or false.

1. We get fruits and vegetables on stationery shop. []

2. We go to school to buy medicines. []

3. We go to a post office to buy stamps, post cards and stamped envelopes. []

4. A dispensary is not as big as a hospital. []

5. We call the fire station to help for put out fire. []

6. A farmer sells fruits and vegetables. []


7. A carpenter makes and repairs our furniture. []

8. An architect designs buildings. []

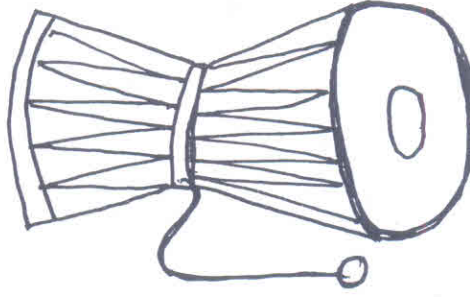
9. A teacher looks after us when we are sick. []

10. We dial 102 to call an ambulance. []

I. चित्र को पहचान कर शब्द की पूर्ति कीजिए -



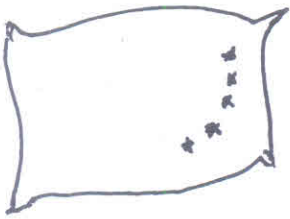
_____ करी



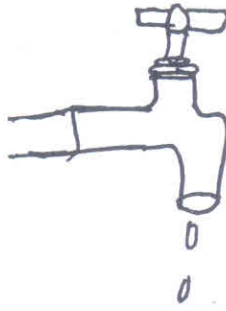
_____ मृदंग



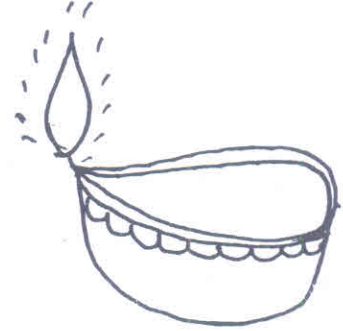
_____ ली



_____ था



_____ ल



_____ क

II. वर्णों को जोड़कर लिखिए -

1. न + े + व + ल + ा = _____

2. ध + ॊ + प = _____


3. द + ि + ल = _____

4. त + ी + र = _____


5. ठ + ी + क + र = _____

6. ट + ॊ + क + ड + ा = _____

III. चित्र को उनके नाम से रेखा खींचकर मिलाइए -




नयन



दरवाजा




आँख



चूड़ियाँ

IV. दिया गया आकृतियों में रंग भरिए -




हरा



लाल



पीला




गुलाबी



नीला



संतरा



काला

Azaan International School

Activity sheet I (2019-20)

Grade - II

Sec: _____

Subject - Math

Name: _____

Date: _____

Chapter-9 More Multiplication

I. Complete the multiplication facts below and observe the pattern.

a) $2 \times 1 =$

a) $1 \times 2 =$

b) $4 \times 1 =$

b) $1 \times 4 =$

c) $6 \times 1 =$

c) $1 \times 6 =$

d) $9 \times 1 =$

d) $1 \times 9 =$

II a. Write the turnaround facts of the following multiplication statements.

a) $2 \times 4 =$ \times

b) $6 \times 3 =$ \times

c) $7 \times 5 =$ \times

d) $9 \times 7 =$ \times

II b. Turnaround facts – Word Statement.

Asif eats 5 mangoes for 3 days. How many mangoes does he ate?

\times $=$

Asif's sister eats 3 mangoes for 5 days. How many mangoes does she ate?

$$\square \times \square = \square$$

III. Write the multiplication statement and find the product.

There are 6 cars. In each car 4 people are sitting. How many people are sitting in all 6 cars together ?

$$\square \times \square = \square$$

IV. Complete the following multiplication statement and write the products using the multiplication lines.

a) $12 \times 7 =$

$$10 \times 7 = \square$$

$$2 \times 7 = \square$$

+

$$12 \times 7 = \square$$

V. Find the product for the given sums.

a) Tens Ones

1 3

X 4

b) Tens Ones

1 8

X 5

VI. Problem Solving – Word Statement

15 packets of milk in a day are used in a ice cream shop to make ice-creams . How many packets of milk will be used in 4 days?

Number of packets used in a day =

Number of days =

Total number of packets used =

	Tens	Ones
X		

The total number of packets used in 4 days will be _____.

Azaan International School

Activity sheet I (2019-20)

Grade - II

Sec:_____

Subject-Telugu

Name:_____

Date: _____

I. 'జ' and 'ఐ' సరైన అక్షరం చుట్టూ గీత గీయము. (circle the letters 'జ' and 'ఐ')

1. ఏ జ ఐ ఊ
2. ఆ ఏ జ ఋ
3. ఈ ఇ ఐ జ
4. ఇ అ జ ఊ

II. అక్షరములను క్రమ పద్ధతిలో వ్రాయము. (Arrange the letters in the correct order)

ఆ ఋ అ ఈ ఊ ఋ ఉ ఇ ఏ ఐ ఎ

III. జతపర్చుము. (match the following)

ఋ

ఐ

ఐ

ఓ

ఓ

ఔ

ఔ

ఋ



అం

ఎ

ఎ

అం

IV. ఖాళీలను పూరింపుము. (Missing Letters)



Azaan International School

Activity sheet 1 (2019-20)

Grade - II

Sec: _____

Subject- **URDU**

Name: _____

Date: _____


① جملے پڑھئے اور دی گئی تصویر کا نام خالی جگہ میں لکھئے۔

① 10 پھل لائے۔ _____

② _____

③ چل چل _____

II دئے گئے دائرے میں نوں غنتہ والے الفاظ کو ڈھونڈ کر اس کو دائرہ کی شکل میں ہر رنگ سے رنگ کرے۔



حروف کو جوڑ کر نوں غنّہ والے الفاظ نیچے دی گئی خالی جگہوں میں لکھیے :-

چ	و	ں	ے	م
بو	ں	و	ک	ا
و	و	و	ا	ں
ں	ں	ا	و	ک